

Below are some word problems and Answers. I did include a blank copy for your use. The numbers may be to large for our kindergarten group but it is a good example. You can change the numbers to be anything that your child will be able to work on.

Answer Below

Name: _____

Directions: Read and solve the word problem to find out how many apples in all.

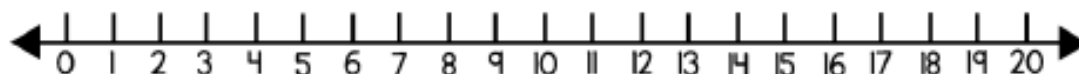


Johnny Appleseed

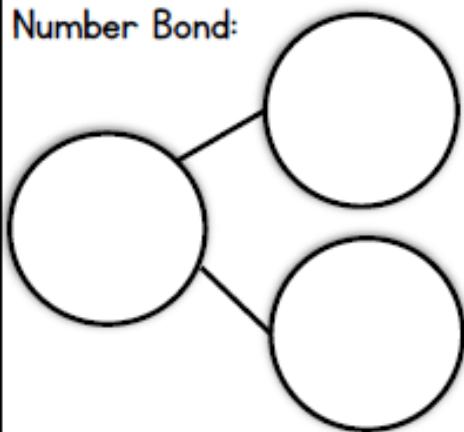
Johnny planted 9 seeds. He planted 8 more seeds. How many seeds did he plant in all?

Ten Frames:

Number Line:



Number Bond:



Equation:

$$\underline{\quad} + \underline{\quad} = \underline{\quad}$$

Answer Statement:

Name: _____

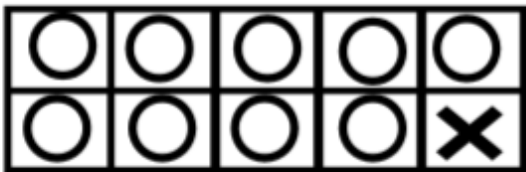
Directions: Read and solve the word problem to find out how many apples in all.



Johnny Appleseed

Johnny planted 9 seeds. He planted 8 more seeds. How many seeds did he plant in all?

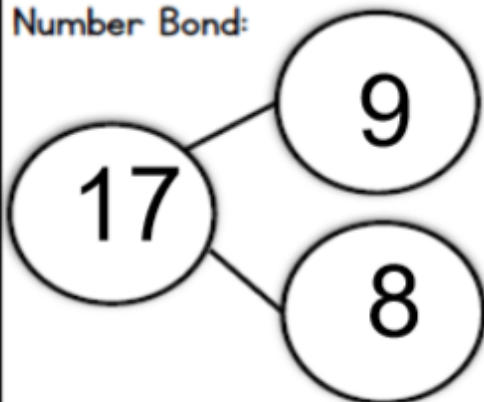
Ten Frames:



Number Line:



Number Bond:



Equation:

$$\underline{9} + \underline{8} = \underline{17}$$

Answer Statement:

9 seeds plus 8 more seeds equals 17 seeds

Name: _____


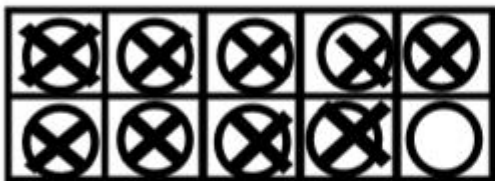


Directions: Read and solve the word problem to find out how many more grasshoppers.

Camping Trip Visitors

On the camping trip 17 grasshoppers jumped into dad's sleeping bag and 9 jumped into mom's. How many more grasshoppers jumped into dad's sleeping bag?

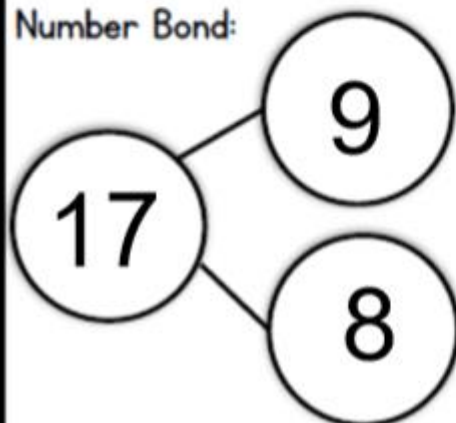
Ten Frames:



Number Line:



Number Bond:



Equation:

$$17 - 9 = 8$$

Answer Statement:

17 take away 9
equals 8